

Maple Class 09.02.21: Year 3

Emotional Well-Being:

Taking time for yourself to do something that relaxes you is so important. I personally like to read books set in foreign countries to relax me; it makes me feel like I am having an adventure from my sofa! Today, I would like you to spend some time thinking about what makes you feel relaxed and happy. Maybe you like reading, colouring, artwork, listening or playing music or maybe you like chatting with your family. Whatever it is that you like to do, I would like you to spend some time today doing something that relaxes you. You can send me a picture on Class Dojo if you like as well!

English:

Today we are going to be writing the first section of our report. I would suggest folding your page length ways in half, then drawing a line with your pencil and a ruler to mark out the columns of the newspaper. Today, just work on getting the first column done. Take your time, think carefully about what you are going to write and how to include grammar we have been looking at this week. Use a dictionary to check your spellings if you need to.

Grammar:

Conjunctions, time conjunctions, fronted adverbials, speech. Don't forget the basics: capital letters, finger spaces, full stops.

Maths:

Today we are converting pounds and pence.

Watch these videos to help you:

<https://outlook.office.com/mail/inbox/id/AAQkADM1MDA0MTQ5LWY3YTUtNDhkOC04Nzc5LTQ1MGNINDU1M2RIZAAQAGECG%2BUhLxBMooWT80zUhpq%3D>

<https://whiterosemaths.com/homelearning/year-3/spring-week-4-measurement-money/>

^ The 4th video will help you.

Expectations:

- Everyone will complete fluency, 1 reasoning and 1 problem solving.
- Some people will complete 2 reasoning and 2 problem solving.
- Few people will complete all the tasks.

Collective Worship:

Who was St. Valentine and what were some of the stories about him? Around the world, there have been many traditions and customs that have taken place on or around Valentine's Day. Some customs have disappeared completely, and some still happen today. Over 100 years ago couples would try and leave gifts at their sweetheart's door without being noticed. A similar custom that still takes place today in Norfolk is the ritual of Jack Valentine. Legend has it that Jack Valentine may knock on your door, but before you manage to open it, Jack disappears, leaving a gift on your doorstep. The practise of leaving presents on the doorstep of a neighbour, friend or loved one continues today.

Time to reflect

- Who would you give a gift to and what would you give them?
- Do traditions like this and others (e.g. carol singing), help to show care and concern for our community?

Reflection (Prayer)

(Dear God)

We are thankful for stories, traditions and customs that help us to reflect on positive and important human qualities. At this time of year when we think about love, let us show our love, care and concern for our friends, families and communities. *(Amen)*

Internet Safety Day:

There is a worksheet on sharing things online or in real life. Please complete this. Can you think of why being private is important? Can you make a poem, song, rap or poster explaining why it is important to be private on the internet?

PE:

Please complete this week's Joe Wick's or practice some Just Dance, Go Noodle or Cosmic Yoga.

Work:

Maths:

Fluency:

F1)

What is the total value of these coins?

Find groups of £1 or 100p.

Can you write the total as pounds and as pence?

For example: £1.50 or 150p



Fluency:

F2)

Write these 2 amounts as pounds and pence.



Fluency:

F3)

Write each of these amounts in pounds and pence. For example: £1.50

1. 165p
2. 234p
3. 199p
4. 112p
5. 516p

Reasoning:

R1)

Whitney thinks that she has £10 and 3p.
Is she correct?



Explain your answer.

Problem Solving:

P1)

Dexter has 202 pence.

He has **one** pound coin.

Show five possible combinations of other coins he may have.

Problem Solving:

P2)

Dora thinks there is more than £5 but less than £6
Is Dora correct?






Convince me.

Problem Solving:

P3)

Match the child to the correct amount of money.

| Savings A | Savings B | Savings C |
|--|---|--|
|  |  |  |

Grace: I have less than £7.

Polly: I have the exact number of pounds.

Finn: I have more than seven pounds.

Internet Safety



family



family and friends



everybody

Circle the items you would give to each group of people using a red, green or blue pencil



My name



A secret



Now circle the items they could give you back, using a yellow pencil.