

**Emotional Well-Being:**

Taking time for yourself to do something that relaxes you is so important. I personally like to read books set in foreign countries to relax me; it makes me feel like I am having an adventure from my sofa! Today, I would like you to spend some time thinking about what makes you feel relaxed and happy. Maybe you like reading, colouring, artwork, listening or playing music or maybe you like chatting with your family. Whatever it is that you like to do, I would like you to spend some time today doing something that relaxes you. You can send me a picture on Class Dojo if you like as well!

**English:**

Today we are going to be writing the second section of our report. Remember to keep using those columns. Today, just work on getting the second column done.

Take your time, think carefully about what you are going to write and how to include grammar we have been looking at this week. Use a dictionary to check your spellings if you need to.

**Grammar:**

Conjunctions, commas in a list, expanded noun phrases, when and if at the start of a sentence, apostrophe of possession or contraction. **Don't forget the basics: capital letters, finger spaces, full stops.**

**Maths:**

Today we are describing turns and movement at the same time. It can be useful to have something concrete to help with this like a plastic toy animal.

Watch these videos to help you:

[https://www.youtube.com/watch?v=6lHmk5F\\_m-l&ab\\_channel=GrangePrimarySchool](https://www.youtube.com/watch?v=6lHmk5F_m-l&ab_channel=GrangePrimarySchool)

[https://www.youtube.com/watch?v=uXwbzbYLHxg&ab\\_channel=RedwoodPrimary](https://www.youtube.com/watch?v=uXwbzbYLHxg&ab_channel=RedwoodPrimary)

<https://vimeo.com/430109634>

**Expectations:**

- Everyone will complete fluency, 1 reasoning and 1 problem solving.
- Some people will complete 2 reasoning and 2 problem solving.
- Few people will complete all the tasks.

## Collective Worship:

Can anyone remember what Jack Valentine does on Valentine's Day? Around 300 years ago single women would pin bay leaves to their pillows before going to bed in the hopes that the leaves would cause them to dream about their future husband. Today in Denmark, men write love poems or notes and send them to their sweetheart on Valentine's Day. If the sweetheart is able to guess who sent the note, then she will receive an Easter egg later that year. But

if her guess is wrong, then she has to give an Easter egg to the man who sent her the note. In some countries it is friendship that celebrated, not just romance, cards and gifts are shared amongst friends.

### **Time to reflect**

- Do you think it is a good idea to celebrate friends and friendship?
- What custom could you come up with to celebrate friendship?

### **Reflection (Prayer)**

*(Dear God)*

We are thankful for stories, traditions and customs that help us to reflect on positive and important human qualities. At this time of year when we think about love, let us show our love, care and concern for our friends, families and communities. *(Amen)*

Science:

Please see the work set by Miss Swan.

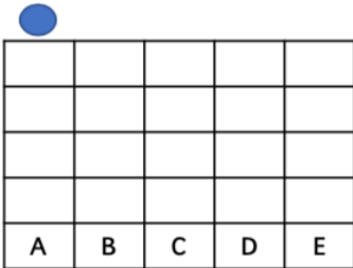
## Work:

### Maths:

Fluency:

F1)

To reach the letter C the counter moves down 4, right \_\_\_\_\_ and down 1.



Fluency:

F2)

The arrow moves 3 steps forward. How many quarter turns right to face the house?



Fluency:

F3)

1 half turn = \_\_\_\_\_ quarter turns.

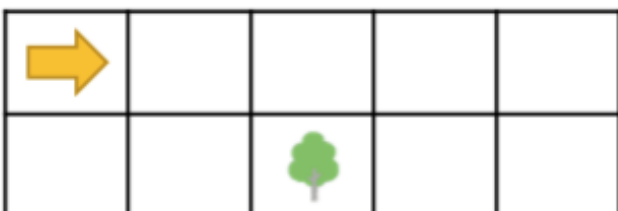
1 whole turn = \_\_\_\_\_ quarter turns.

1 whole turn = \_\_\_\_\_ half turns.

Fluency:

F4)

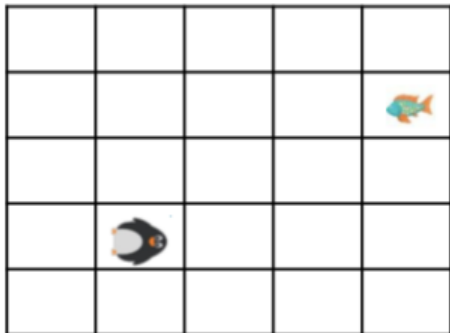
The arrow moves 2 steps forward. How many quarter turns anti-clockwise to face the tree?



Reasoning:

R1)


Lily thinks that the penguin needs to go forward 3 squares, make a half turn anti-clockwise and go forward 2 squares. Is she correct? Explain why.



Reasoning:

R2)

Serenity thinks that for the bee to get to the flower he should go backwards 2 squares, make a quarter turn anti-clockwise then go forwards 2 squares. Is she correct? Explain why.



Reasoning:

R3)

Thomas thinks that for the mouse to get to the cheese he should make a quarter turn anti-clockwise, forward 1 square, up 1 square, forward 1 square, up 3 squares. Is he correct? Explain why.



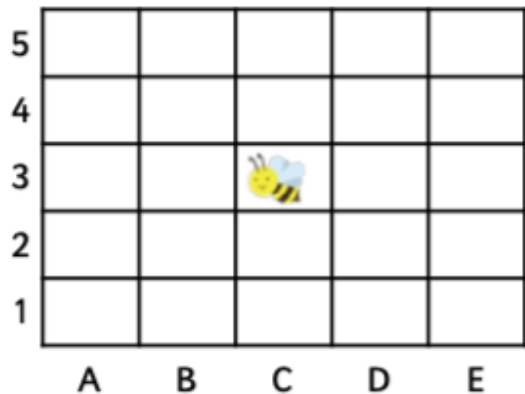
Problem Solving:

P1)

The bee has lost his honey!

He knows that he moved forward 1 square, quarter turn clockwise, forward 1 square then turned and went forward 1 square. He can't remember which direction he turned.

Put X where the web could be.



Problem Solving:

P2)

The spider has spun a web but forgot where it is! He turned and then moved forward 3 times. He can't remember the direction of the turn. Put X where the web could be.

