

Year 4 – Mr. Churchill

Wednesday 27th January 2021

English

Today, your task is to answer more questions based on the narrative poem 'The Adventures of Isabel'. Please re-read the poem from yesterday and use it to answer the questions on the English resource sheet. Re-read the poem as often as you need to. **After you have completed the final question, please write a short paragraph expressing your opinion of the poem-make sure you use the text to support your answer. E.g. I really liked the poem because Ogden Nash uses really good ideas and his use of vocabulary is excellent (e.g. ravenous, cavernous). I also liked how it rhymed!**

English-Reading

Please continue reading your chosen text for 20 minutes. Once you have completed this reading, please answer the following challenge:

Draw a poster to advertise your chosen text.

Mathematics

In mathematics, we are continuing to concentrate on area. Please watch the following video and complete the worksheet attached.

<https://vimeo.com/500864228>

Remember, you can watch this video as many times as you need to.

Science

Miss Swan has set the Science work for today.

Prayer and EWB after maths and English resources

English resource:

8. Read the second verse.

Copy a simile from the second verse.

.....

9. Which two lines are repeated in the first and second verse? Copy them.

.....

.....

10. Why has the author repeated these lines?

.....

.....

11. Find two examples of alliteration in the second verse.

.....

.....

12. What does **rancour** mean? Look it up in the dictionary and write its meaning.

.....

.....

13. What did Isabel do to the witch?

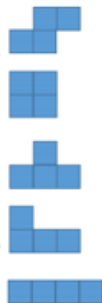
.....

Mathematics Task resource

Fluency

F1)

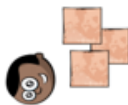
Ron has 4 squares.
He systematically makes rectilinear shapes.



Use 5 squares to make rectilinear shapes.
Can you work systematically?

F2)

Mo is building a patio made of 20 square slabs.
What could the patio look like?
Mo is using 6 black square slabs in his design.
None of them are touching each other.
Where could they be in the designs you have made?



Reasoning

R1)

Here is a rectilinear shape.



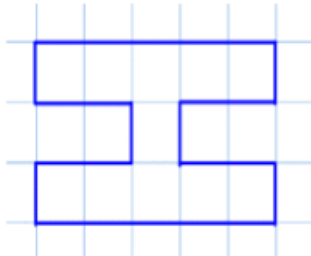
Using 7 more squares, can you make a rectangle?

Can you find more than one way?

Problem solving

PS1)

Can you make some capital letters on squared paper using less than 20 squares?



Make a word from some and count the total area of the letters.

Which letters have a line of symmetry?
What is the area of half of each letter?

The Lord's Prayer

See below.

Emotional Well-Being Activity

Please select another activity from the options provided yesterday.

Prayer resource:

The Lord's Prayer

Our Father in Heaven,
Hallowed be Your name,
Your Kingdom come,
Your will be done,
On earth as it is in Heaven.
Give us today our daily bread.
Forgive us our sins,
As we forgive those who sin against us.
Lead us not into temptation,
But deliver us from evil.
For the Kingdom, the power
And the glory are Yours
Now and for ever.
Amen.



