

## Year 3: 23.10.2020

Good morning everyone! I hope this finds you well!

### Emotional Well-Being:

Good morning boys and girls, today we would have normally done Celebration Assembly. Please can you nominate a member of your household to be your Star of the Week and give them a certificate. Explain to them why you have chosen them.

### English:

Today we are going to finish our non-chronological reports. Please could you re-write your report include any corrections in spelling and grammar that you made yesterday. I would like you to slowly go through and think if there any areas where you could up level the vocabulary. For example, instead of big, sharp teeth could you say huge, razor sharp teeth? Remember to use a regular HB pencil and not a colouring pencil.

### Maths:

Today I would like everyone to give the end of unit assessment a go. This is not a test, do not worry! I just want to see what we know, what we can remember and what we should recap in class again. Getting something wrong is not a problem, we'll work on it together. Please try your very best, as you always do. Make sure to complete the bottom section where you decide how confident you are with this topic.

Please complete the worksheet attached. Once you are done mark it with your parent/carer if possible, to discuss your answers.

## PE:

Next half term we are going to be looking at dance. I would like you to get a little head start by showing off some of your dance moves to your parents/carers. Can you make a dance up to your favourite song? Can you add some fun steps? You could use these videos to help get you into the mood.

[https://www.youtube.com/watch?v=Y9LLfv7yauM&ab\\_channel=SteveSteve](https://www.youtube.com/watch?v=Y9LLfv7yauM&ab_channel=SteveSteve)  
[https://www.youtube.com/watch?v=UQr79y06poU&ab\\_channel=JustDance](https://www.youtube.com/watch?v=UQr79y06poU&ab_channel=JustDance)

## Prayer/Reflection Time:

We have been thinking about harvest festival.

This week we have highlighted just a few of the many traditions that take place to celebrate food. We as humans need to eat; we need a variety of healthy and nutritious foods, many of which are dependent on the right type of environments to grow. They need the right amount of sun and the right amount of rain. Oranges need to be grown in a hot and dry country, potatoes need to be grown in a damp and cool country. Our very survival requires us to work with nature to simply produce enough food. Natural disasters and a swarm of pests can ruin a crop that we rely on. Harvest festivals are common across the world because the simple act of eating unites us no matter where we live or what culture we belong to. Many religious and non-religious people pray or pause before each meal, reminding themselves to be thankful for their food. Harvest festivals are celebrated once each year; but every day try to remember 'if we're full, we're thankful'.

### **Time to reflect**

When you are full are you thankful?

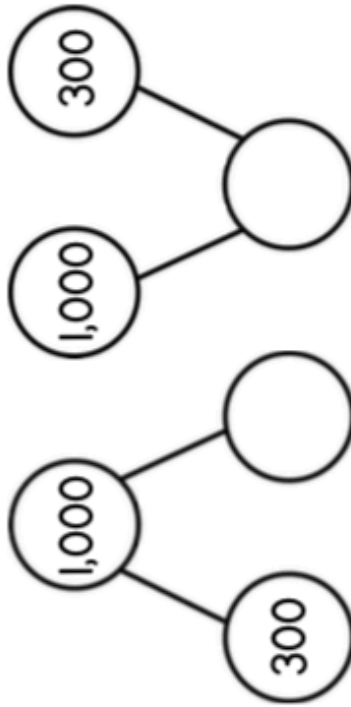
### **Reflection (Prayer)**

*(Dear God)*

We are especially thankful at this time of year for a good harvest of food. We think of those who don't have enough food in our own country and for those around the world. Let us at this harvest time, demonstrate how thankful we are by being generous with what we have. (Amen)

Name \_\_\_\_\_

- 1 Complete the part-whole models.



- 2 Alex has 262 stickers.

He buys 6 more.

How many stickers does he have now?

2 marks

1 mark

- 3 Find the missing number.

$$522 = 8 + \underline{\hspace{2cm}}$$

1 mark

- 4 Complete the calculations. Show your working.

$$17 + 42 = \underline{\hspace{2cm}}$$

$$55 - 19 = \underline{\hspace{2cm}}$$

$$34 + 82 = \underline{\hspace{2cm}}$$

3 marks

- 5 Tommy makes this number.



He subtracts forty.

What is Tommy's new number?

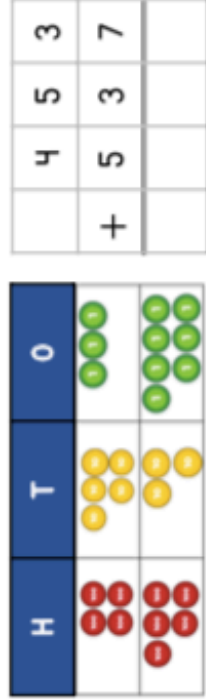
\_\_\_\_\_

1 mark

Worksheets:

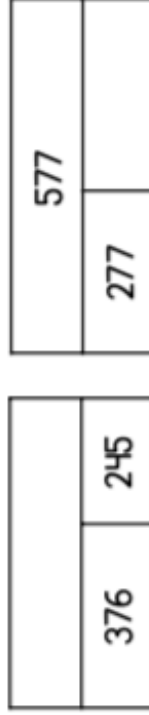
- 6 Work out  $453 + 537$

You may use the counters to help



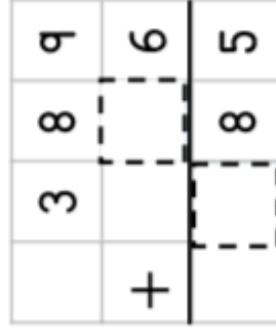

1 mark

- 7 Complete the bar models.




2 marks

- 8 Complete the missing digits.



- 9 Explain the mistake.




1 mark

- 10 Rosie wants to work out  $102 - 98$  in her head.  
Explain a method that Rosie could use.

1 mark

Circle how confident you feel with addition & subtraction.

2 marks

1    2    3    4    5

Not  
confident

Very  
confident